



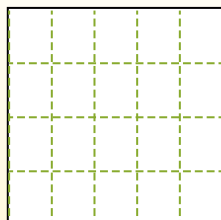
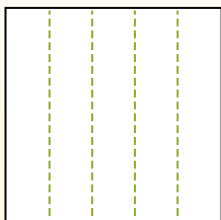
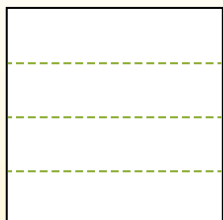
Partition the shape as described and then count to find the number of boxes.

Answers

Rows go left to right.


Columns go up and down.

This has 4 rows and 5 columns.
There are 20 boxes total.




1. _____
2. _____
3. _____
4. _____
5. _____
6. _____
7. _____
8. _____
9. _____


1) 4 rows
2 columns




2) 2 rows
2 columns




3) 5 rows
3 columns



4) 5 rows
4 columns




5) 3 rows
2 columns




6) 4 rows
3 columns




7) 3 rows
4 columns



8) 2 rows
3 columns



9) 3 rows
3 columns



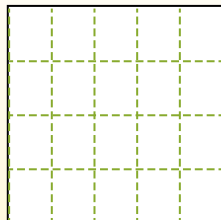
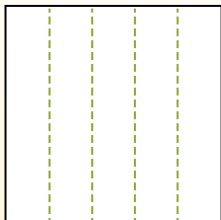



Partition the shape as described and then count to find the number of boxes.

Rows go left to right.

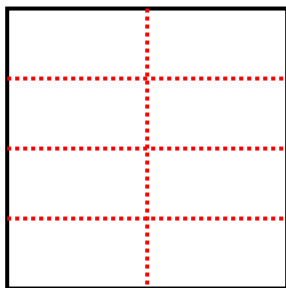
Columns go up and down.

This has 4 rows and 5 columns.
There are 20 boxes total.

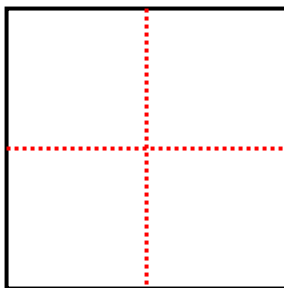


Answers

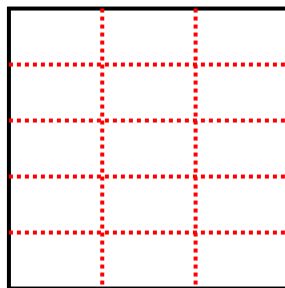
1) 4 rows
2 columns



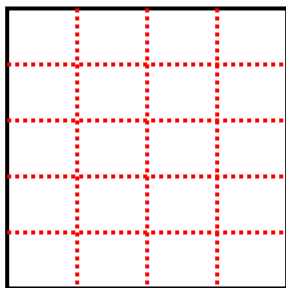
2) 2 rows
2 columns



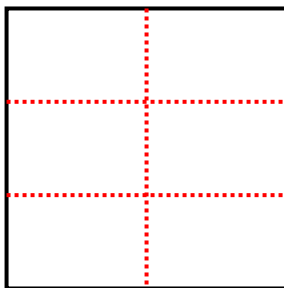
3) 5 rows
3 columns



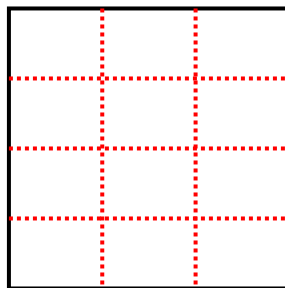
4) 5 rows
4 columns



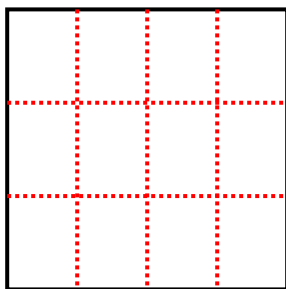
5) 3 rows
2 columns



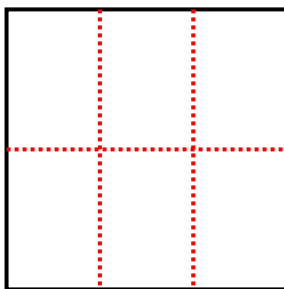
6) 4 rows
3 columns



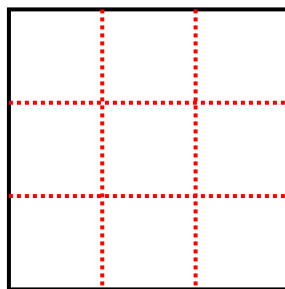
7) 3 rows
4 columns



8) 2 rows
3 columns



9) 3 rows
3 columns



1. 8

2. 4

3. 15

4. 20

5. 6

6. 12

7. 12

8. 6

9. 9